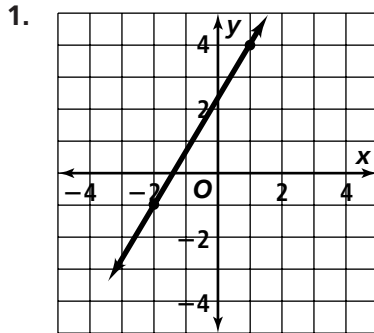


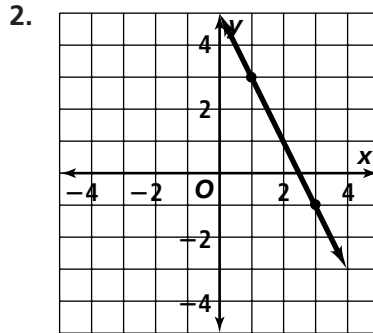
# Practice 6-1

## Rate of Change and Slope

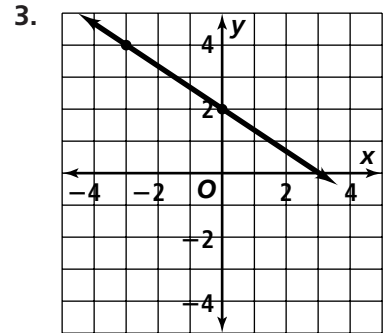
Find the slope of each line.



\_\_\_\_\_



\_\_\_\_\_



\_\_\_\_\_

Find the slope of the line that passes through each pair of points.

4.  $(4, 4), (7, 5)$

\_\_\_\_\_

5.  $(8, 3), (4, 6)$

\_\_\_\_\_

6.  $(2, 5), (4, 7)$

\_\_\_\_\_

7.  $(-1, 7), (4, -2)$

\_\_\_\_\_

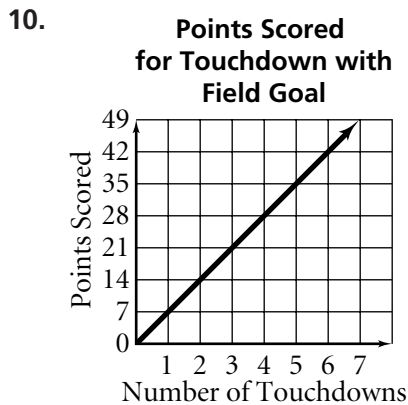
8.  $(1, 6), (5, 9)$

\_\_\_\_\_

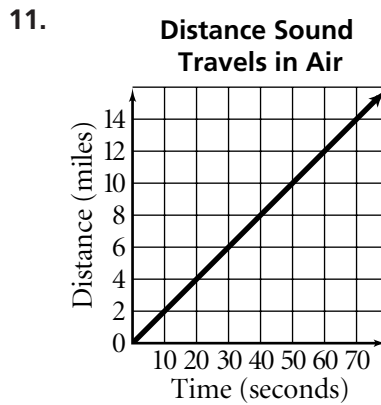
9.  $(-3, -6), (3, 4)$

\_\_\_\_\_

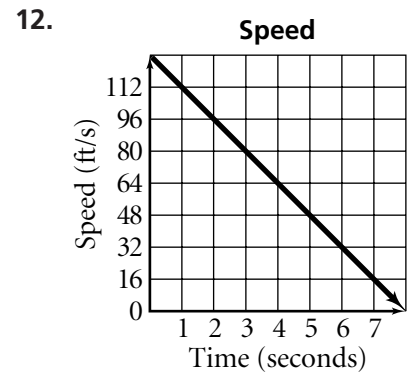
Find the rate of change.



\_\_\_\_\_



\_\_\_\_\_



\_\_\_\_\_

All rights reserved.

© Pearson Education, Inc., publishing as Pearson Prentice Hall.